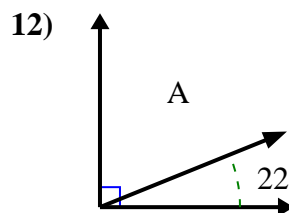
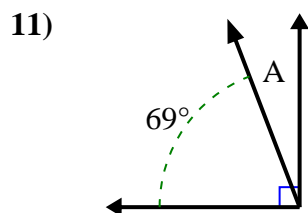
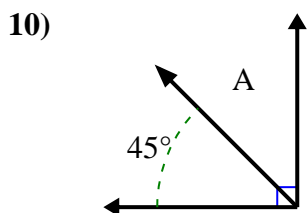
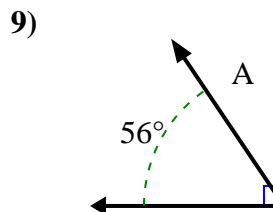
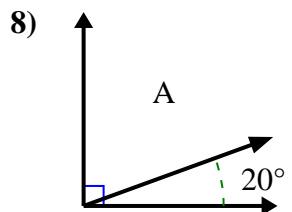
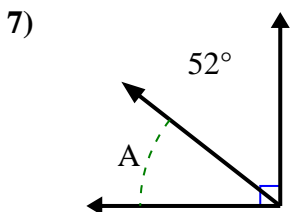
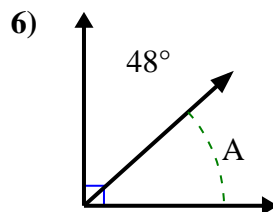
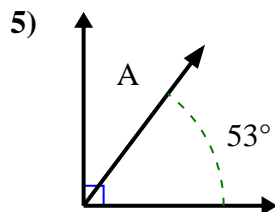
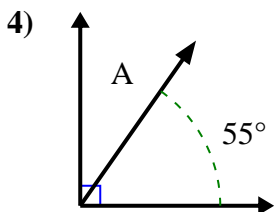
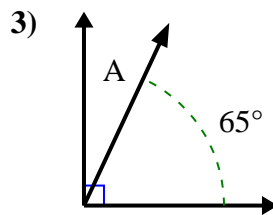
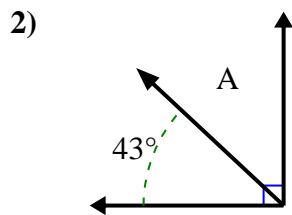
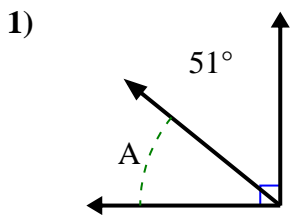




Find the value of 'A' in the set of complementary angles.

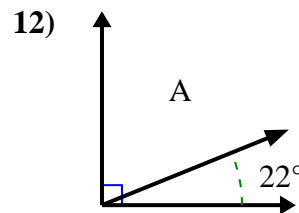
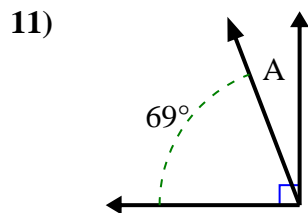
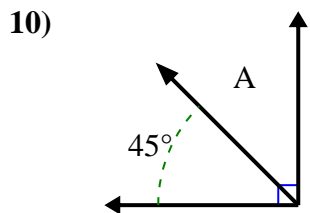
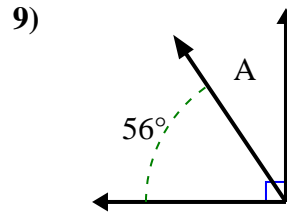
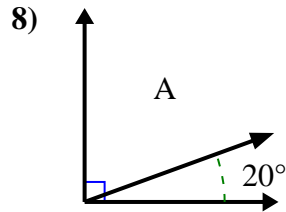
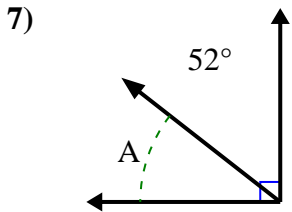
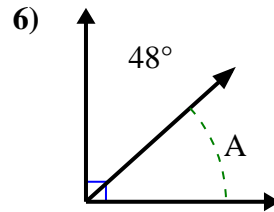
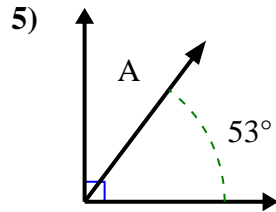
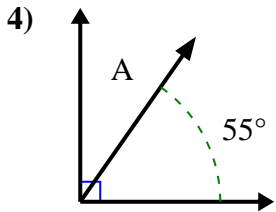
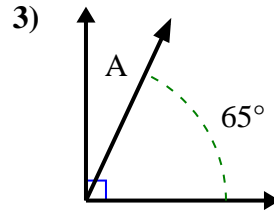
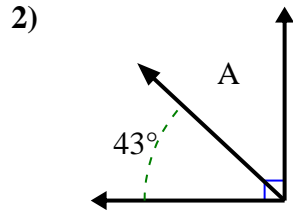
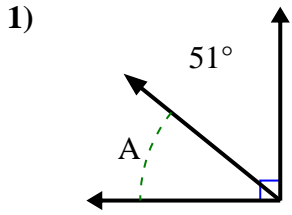
Answers



1. \_\_\_\_\_
2. \_\_\_\_\_
3. \_\_\_\_\_
4. \_\_\_\_\_
5. \_\_\_\_\_
6. \_\_\_\_\_
7. \_\_\_\_\_
8. \_\_\_\_\_
9. \_\_\_\_\_
10. \_\_\_\_\_
11. \_\_\_\_\_
12. \_\_\_\_\_



Find the value of 'A' in the set of complementary angles.



Answers

1. 39°
2. 47°
3. 25°
4. 35°
5. 37°
6. 42°
7. 38°
8. 70°
9. 34°
10. 45°
11. 21°
12. 68°